

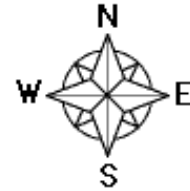
Name: \_\_\_\_\_

# Global Treasure Hunt #1

Use a globe or detailed world map to follow the trail.

1. Find the longitude and latitude of where you are right now.

\_\_\_\_\_



2. Travel south to  $90^{\circ}\text{S}$ . What continent are you on?

**A** ○ \_\_\_\_\_

3. Travel north along  $75^{\circ}\text{W}$  to the equator. What continent are you on?

\_\_\_\_\_ ○ \_\_\_\_\_

4. Travel east along the equator to  $20^{\circ}\text{E}$ . What continent are you on?

\_\_\_\_\_ ○ \_\_\_\_\_

5. Go north on  $20^{\circ}\text{E}$  to  $52^{\circ}\text{N}$ . What continent are you on?

\_\_\_\_\_ ○ \_\_\_\_\_

6. Travel west along  $52^{\circ}\text{N}$  to  $60^{\circ}\text{W}$ . What continent are you on?

○ \_\_\_\_\_

7. Go north along  $60^{\circ}\text{W}$  to  $90^{\circ}\text{N}$ , then (still traveling in a straight line) travel south along  $120^{\circ}\text{E}$  to  $50^{\circ}\text{N}$ . What continent are you on?

\_\_\_\_\_ ○ \_\_\_\_\_


8. Continue traveling south for another  $80^{\circ}$ . What continent are you on?

\_\_\_\_\_ ○ \_\_\_\_\_

9. You have just traveled to each of the seven \_\_\_\_\_ on earth.

\_\_\_\_\_ ○ ○

©EnchantedLearning.com



Write the circled letters: \_\_\_\_\_

Unscramble the letters to find the geography word: \_\_\_\_\_

# Global Treasure Hunt #1

Use a globe or detailed world map to follow the trail.

## Answers

1. Find the longitude and latitude of where you are right now.

\_\_\_\_\_

2. Travel south to  $90^{\circ}\text{S}$ . What continent are you on?

A (n) t a r c t i c a

3. Travel north along  $75^{\circ}\text{W}$  to the equator. What continent are you on?

S o (u) t h A m (e) r i c a

4. Travel east along the equator to  $20^{\circ}\text{E}$ . What continent are you on?

A f r i (c) a

5. Go north on  $20^{\circ}\text{E}$  to  $52^{\circ}\text{N}$ . What continent are you on?

E u r (o) p e

6. Travel west along  $52^{\circ}\text{N}$  to  $60^{\circ}\text{W}$ . What continent are you on?

(N) o r t h A m e r i c a

7. Go north along  $60^{\circ}\text{W}$  to  $90^{\circ}\text{N}$ , then (still traveling in a straight line) travel south along  $120^{\circ}\text{E}$  to  $50^{\circ}\text{N}$ . What continent are you on?


A s (i) a

8. Continue traveling south for another  $80^{\circ}$ . What continent are you on?

A u s (t) r a l i a

9. You have just traveled to each of the seven \_\_\_\_\_ on earth.

c o n t i n e (n) t (s)



Write the circled letters: n t e c o n i t n s

Unscramble the letters to find the geography word: c o n t i n e n t s